








How much?

1)

= _____

2)

= _____

3)

= _____

4)

= _____

5)










= _____

6)

= _____

7)

= _____

8)

= _____

9)




= _____

10)



= _____

11)



= _____

12)



= _____



= _____



= _____



= _____

Count the money

1)



= _____

2)



= _____

3)



= _____

4)



=

5)



=

6)



=

7)



= _____

8)



= _____

9)



= _____

10)



= _____